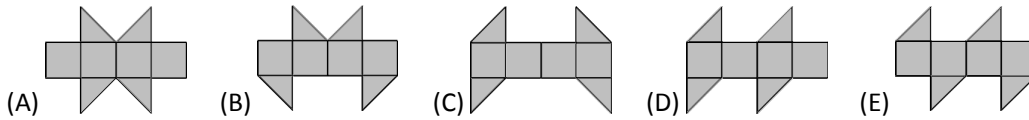


Math Kangaroo Level Books

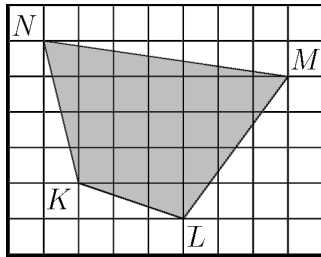
Cadet [중1-2]
[샘플 문제]



1. One of the following nets cannot be folded to form a cube. Which one?

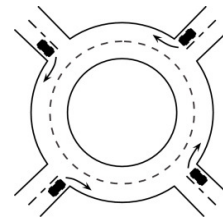


2. The diagram shows a shaded quadrilateral $KLMN$ drawn on a grid. Each cell of the grid has sides of length 2 cm. What is the area of $KLMN$?



- (A) 96 cm^2 (B) 84 cm^2 (C) 76 cm^2 (D) 88 cm^2 (E) 104 cm^2

3. Four cars enter a roundabout at the same time, each one from a different direction, as shown in the diagram. Each of the cars drives less than a full round of the roundabout, and no two cars leave the roundabout in the same direction. How many different ways are there for the cars to leave the roundabout?



- (A) 9 (B) 12 (C) 15 (D) 24 (E) 81

4. Nick, Ryan, Simon and James from the band Dandelion sang a few songs at their first concert. Always three of them were singing, and one was playing the guitar in accompaniment. James sang the most songs of all of them – 8. Ryan sang 5 songs, which was fewer than anyone else from the group. How many songs did Dandelion sing at their first concert?

- (A) 8 (B) 9 (C) 10 (D) 13 (E) 26